

# VIBETIME



All correct entries go into a draw at the end of the month to win a cool prize pack

OCTOBER '11

## INFANT K-2

Vibe Time is our numbers activity page.

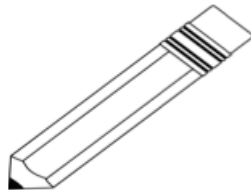
This page is for everyone, but make sure you fill in the entry form below if you are in INFANTS K-2.

### LENGTH

1 Draw a longer caterpillar.




2 Draw a thinner pencil.



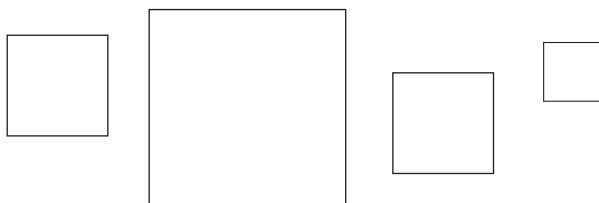
3 Use a ruler to measure and draw lines:

- a) 6cm long
- b) 3cm long
- c) 8cm long

4 Trace over the longest line in **BLUE**.  
Trace over the shortest line in **RED**.  
Trace over the equal-length lines in **GREEN**.



5 Colour the square that has the biggest area **BLUE**.  
Colour the square that has the smallest area **RED**.  
Colour the squares that have equal area **GREEN**.

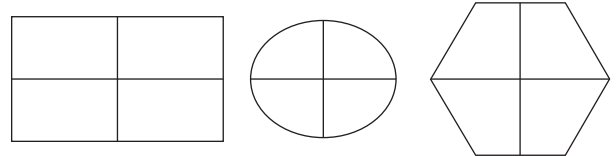


### FRACTIONS

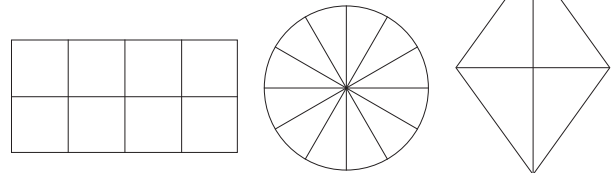
1 Circle half of the objects in this group.



2 Colour one quarter of each shape.



3 Colour one half of each shape.



4 Circle one quarter of these oranges.

One quarter of  is



5 How many eggs?



Circle half of these eggs.

is half of

## ENTER & WIN Teachers, photocopy entries welcome!

If you are in Infants K-2 complete ALL questions on this side and mail back to:  
VIBE TIME, PO BOX 1536, GOULBURN NSW 2580

Name  School name

School Address

Phone  Age  Class

Does your school have a homework centre?



Entries in by  
**25 NOVEMBER 2011**

Vibe Time is operating under permits in NSW (LTPS/10/02750) and ACT (TP 10/01306.1). There is no requirement for a licence for the competition in NT, QLD, WA, SA, TAS and VIC. The Competition will be conducted according to the guidelines of these various State Gaming Authorities. Each month the winner receives a backpack full of goodies including a CD, pen, cap and T-shirts valued at \$50. The total value of prizes awarded annually is \$560.

# VIBETIME



All correct entries go into a draw at the end of the month to win a cool prize pack

OCTOBER '11

## PRIMARY 3-6

Vibe Time is our numbers activity page.

This page is for everyone, but make sure you fill in the entry form below if you are in PRIMARY 3-6

1 A barbecue was held for 145 people.



There were 4 sausages for each person. How many sausages were there altogether?

2 Bryce has three tractors. Each tractor has 4 wheels. How many wheels are there altogether?

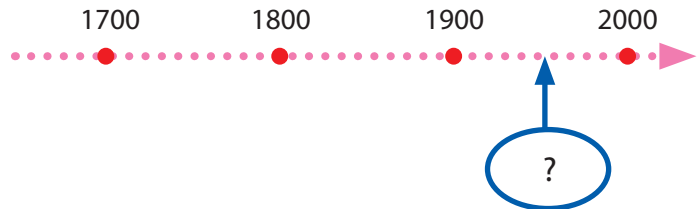



3 What is the numeral for six thousand three hundred and seventy-three?

4 What time is it?




5 Here is a timeline in years.



What year is the arrow pointing to?

- 1715     1815     1850     1950

6 8.46 is equal to

- $0.8 + 0.4 + 0.6$         $8.0 + 0.4 + 0.06$   
  $8 + 0.4 + 0.0$         $7 + 0.004 + 0.06$

7 Which one equals 3189?

- $3 + 1 + 8 + 9$   
  $30 + 10 + 80 + 90$   
  $3000 + 100 + 80 + 9$

8 Jayden has 80 stamps. Kerry has 50 stamps. How many stamps should Jayden give to Kerry so they both have the same number of stamps?



- 5     10     15     20

### ENTER & WIN Teachers, photocopy entries welcome!

If you are in Primary 3-6 complete ALL questions on this side and mail back to: VIBE TIME, PO BOX 1536, GOULDBURN, NSW 2580

Name \_\_\_\_\_ School name \_\_\_\_\_

School Address \_\_\_\_\_

Phone \_\_\_\_\_ Age \_\_\_\_\_ Class \_\_\_\_\_

Does your school have a homework centre? \_\_\_\_\_



Entries in by 16 NOVEMBER 2011

Vibe Time is operating under permits in NSW (LTPS/10/02/50) and ACT (TP/10/01306.1). There is no requirement for a licence for the competition in NT, QLD, WA, SA, TAS and VIC. The Competition will be conducted according to the guidelines of these various State Gaming Authorities. Each month the winner receives a backpack full of goodies including a CD, pen, cap and T-shirts valued at \$50. The total value of prizes awarded annually is \$560.