

VIBETIME

INFANT K-2



All correct entries go into a draw at the end of the month to win a cool prize pack

APRIL '11

Vibe Time is our numbers activity page.

This page is for everyone, but make sure you fill in the entry form below if you are in INFANTS K-2.

1 Which is hotter?



1 Draw a cross on the longest pencil.




2 Circle the objects that are hot.



2 Cross the heavy things. Circle the light things.





3 Circle the objects that are cold.



3 Here are 20 oranges.



Zack sells oranges on the weekend.
How many oranges did he sell this weekend?

SATURDAY	SUNDAY
 <p>Guess</p> <input type="text"/> <p>Check</p> <input type="text"/>	 <p>Guess</p> <input type="text"/> <p>Check</p> <input type="text"/>

ENTER & WIN

If you are in Infants K-2 complete ALL questions on this side and mail back to:
VIBE TIME, PO BOX 810, DARLINGHURST NSW 1300

Name _____ School name _____

School Address _____

Phone _____ Age _____ Class _____

Does your school have a homework centre? _____

Only entries from students in INFANTS K-2 will be marked. Turn over for PRIMARY 3-6

Entries in by
9 MAY 2011

Vibe Time is operating under permits in NSW (LTPS/10/02/750) and ACT (TP 10/01306.1). There is no requirement for a licence for the competition in NT, QLD, WA, SA, TAS and VIC. The Competition will be conducted according to the guidelines of these various State Gaming Authorities. Each month the winner receives a backpack full of goodies including a CD, pen, cap and T-shirts valued at \$50. The total value of prizes awarded annually is \$560.

VIBETIME

PRIMARY 3-6



All correct entries go into a draw at the end of the month to win a cool prize pack

Vibe Time is our numbers activity page.

This page is for everyone, but make sure you fill in the entry form below if you are in PRIMARY 3-6

APRIL '11

1 Jake is making a pattern.

**	*** *	*** ***	*** *** **	?
----	----------	------------	------------------	---

How many * will be in the next box?

- ☐ 10
 ☐ 12
 ☐ 14
 ☐ 16

2 Write six hundred and eighty-nine as a number.

3 Each octopus has 8 legs.



Which of these shows one way to work out the total number of legs?

- ☐ $3 + 3 + 3$
☐ $8 + 3$
☐ $8 - 3$
☐ $8 + 8 + 8$

4 Which one of these has the same value as 15×4 ?

- ☐ $10 + 5 + 4$
☐ $10 \times 5 + 4$
☐ $15 \times 2 + 2$
☐ $10 \times 4 + 20$

5 Helena bought 4 kgs of apples at a cost of \$4.98 per kg. How much did Helena pay? Round it off to the nearest dollar.



- ☐ \$5
 ☐ \$16
 ☐ \$20
 ☐ \$30

6 Which one equals 685?

- ☐ $6 + 8 + 5$
☐ $60 + 80 + 50$
☐ $600 + 80 + 5$

7 Which symbol would you use to make this number sentence correct?

- 42 $9 = 33$
☐ + ☐ x ☐ -

8 Jayden has 80 stamps. Kerry has 50 stamps. How many stamps should Jayden give to Kerry so they both have the same number of stamps?



- ☐ 5
 ☐ 10
 ☐ 15
 ☐ 20

ENTER & WIN

If you are in Primary 3-6 complete ALL questions on this side and mail back to: VIBE TIME, PO BOX 810, DARLINGHURST NSW 1300

Name _____ School name _____
 School Address _____
 Phone _____ Age _____ Class _____
 Does your school have a homework centre? _____

Only entries from students in PRIMARY 3-6 will be marked. Turn over for INFANTS K-2

Entries in by 9 MAY 2011

Vibe Time is operating under permits in NSW (LTPS/10/02750) and ACT (TP 10/01306.1). There is no requirement for a licence for the competition in NT, QLD, WA, SA, TAS and VIC. The Competition will be conducted according to the guidelines of these various State Gaming Authorities. Each month the winner receives a backpack full of goodies including a CD, pen, cap and T-shirts valued at \$50. The total value of prizes awarded annually is \$500.